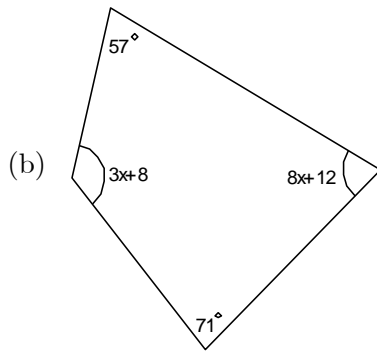
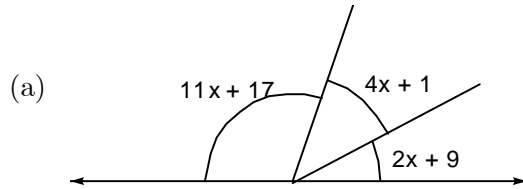


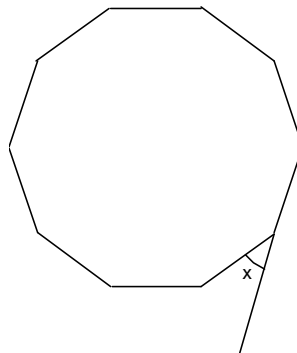
MA 125 - In-Class Assignment 3 - Spring 2008

emaN

1. Find the value of  $x$  in each of the following diagrams.



- (c) The figure is a regular decagon.



2. #8, p. 442

3. #14, p. 443

4. #20, p. 457

5. #22, p. 457

6. #16, p. 463